


Pawn



Name: _____


WORKSHEET

For every square that the white pawn can move, place an "X"




For every square that the black pawn can move, place an "X"

Circle every piece that can be captured by the white pawn.

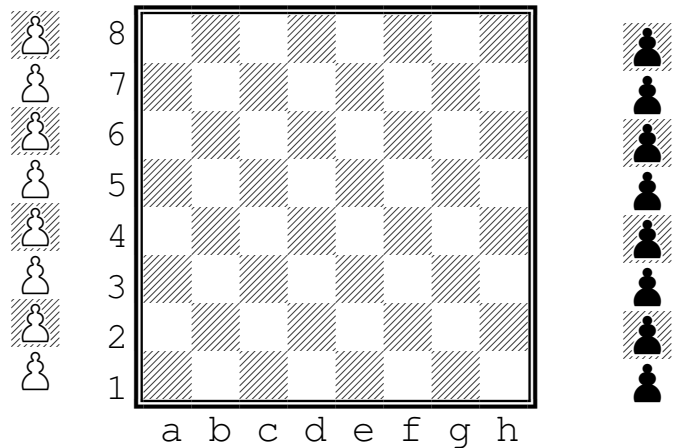


Circle every piece that can be captured by the black pawn.

What happens when a pawn reaches the other side of the board?



Indicate the starting positions of the white pawns with a "W"



Indicate the starting positions of the black pawns with an "B"